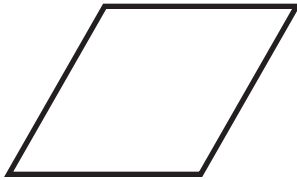


Quadrilaterals


1 What do we call a quadrilateral that has **two** pairs of parallel sides?

2 What do we call a quadrilateral that has only **one** pair of parallel sides?

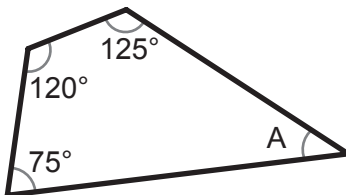
3 This parallelogram has 4 equal sides, but not 4 equal angles. What is its name?



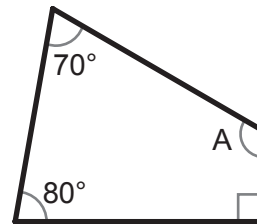
4 This parallelogram has 4 equal angles, but not 4 equal sides. What is its name?




5 Find the unknown angle A.



6 Find the unknown angle A.



7 Find the unknown angles A and B, in this parallelogram.



8 Find angle A in this parallelogram.

