

**Basic Elements of Geometry**

G-PLP 1

**Instructions:** Match each basic element of geometry with the correct picture.

1  $\overleftrightarrow{CD}$



2 Line AB




3 Ray AB



4  $\overline{CD}$



5 Point P



6 Line Segment AB



7 Plane ABC



8  $\overleftrightarrow{CD}$



## Basic Elements of Geometry (alternate)

G-PLP 1

**Instructions:** Match each basic element of geometry with the correct picture by writing the number in the right box.

1  $\overleftrightarrow{CD}$

2 Line AB

3 Ray AB

4  $\overline{CD}$

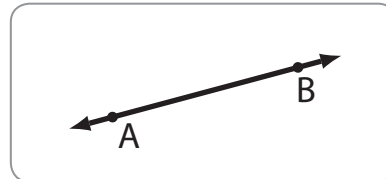
5 Point P

6 Line Segment AB

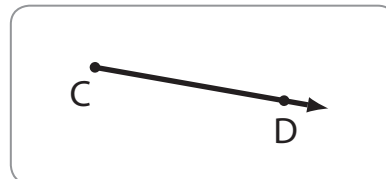
7 Plane ABC

8  $\overleftrightarrow{BA}$

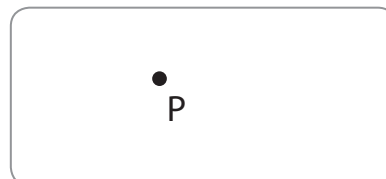
2



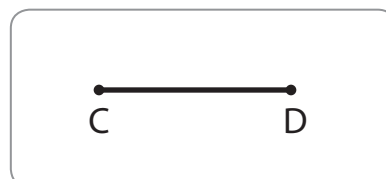
1



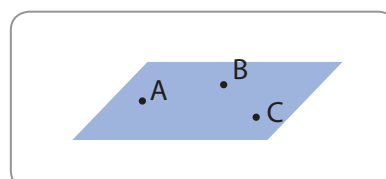
5



4



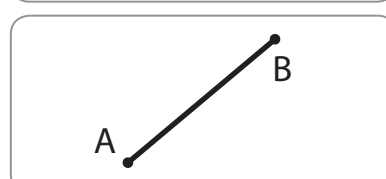
7



8



6



3

