

## Fractions Are Parts

1 What fraction of this rectangle is shaded?



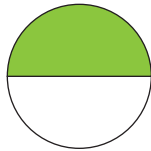
$$\frac{1}{4}$$

2 What fraction of this rectangle is shaded?



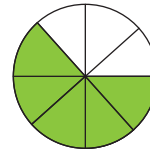
$$\frac{4}{6}$$

3 What fraction of this circle is shaded?




$$\frac{1}{2}$$

4 What fraction of this circle is shaded?



$$\frac{5}{8}$$

5 What fraction of this group is shaded?




$$\frac{3}{4}$$

6 What fraction of this group is shaded?



$$\frac{3}{5}$$

7 Shade  $\frac{3}{4}$  of this box.



8 Shade half of this rectangle.



$$\frac{1}{2} = \frac{2}{4}$$