

Fractions Are Parts

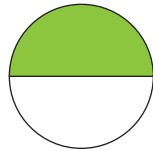
1 What fraction of this rectangle is shaded?



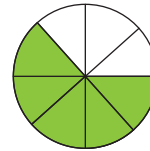
2 What fraction of this rectangle is shaded?




3 What fraction of this circle is shaded?



4 What fraction of this circle is shaded?



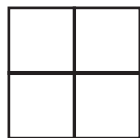
5 What fraction of this group is shaded?



6 What fraction of this group is shaded?



7 Shade $\frac{3}{4}$ of this box.



8 Shade half of this rectangle.

