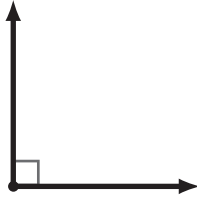
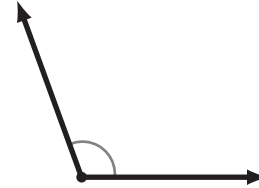


## Angle Basics

**1** What kind of angle is this? \_\_\_\_\_



**2** What kind of angle is this? \_\_\_\_\_



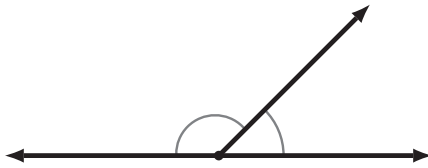
**3** What kind of angle is this? \_\_\_\_\_



**4** What kind of angle is this? \_\_\_\_\_



**5** This diagram shows:



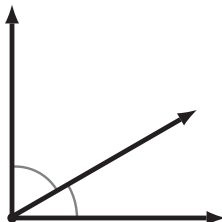
- Parallel Lines
- Perpendicular Lines
- Supplementary Angles
- Complementary Angles

**6** This diagram shows:



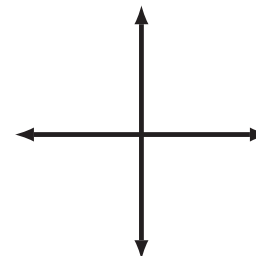
- Parallel Lines
- Perpendicular Lines
- Supplementary Angles
- Complementary Angles

**7** This diagram shows:



- Parallel Lines
- Perpendicular Lines
- Supplementary Angles
- Complementary Angles

**8** This diagram shows:



- Parallel Lines
- Perpendicular Lines
- Supplementary Angles
- Complementary Angles